

Use the shape below to answer question 1.

Trapezoid

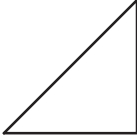


1. How many lines of symmetry does the trapezoid above have?

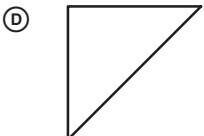
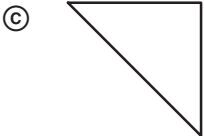
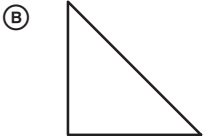
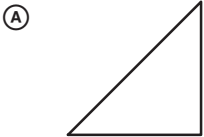
- Ⓐ 1
- Ⓑ 2
- Ⓒ 3
- Ⓓ 4

Use the figure below to answer question 1.

Jackie's triangle



1. Which shows a slide of Jackie's triangle?



MCA-II Item Sampler Answer Key
Grade 3 Mathematics

Item #	Correct Answer	Item Type	Strand	Sub-Strand	Benchmark	Cognitive Level
230698	A	MC	V	A	1	A
232365	A	MC	V	A	2	A